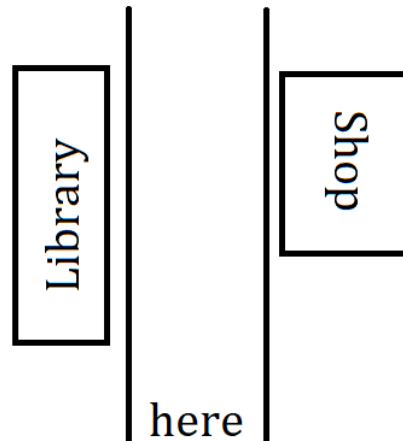


Entry 1: Use everyday positional vocabulary to describe position and direction


1. You are at the beginning of the road, marked with 'here'.



Is the shop on the left or the right of the road?

Is the library on the left or the right of the road?....

2. Here is a family watching TV.



Is the family in front of the TV or behind it?

Answer:


3. Look at the picture below.



Is the tree under or above the sun?

Is the bird under or above the tree?

4. Anna has written some sentences about the position of food items in her fridge. Are they correct?




The cake is below the sandwich.

Carrots are on the left of the apple.

The brown cookie is in front of the white cookie.

Entry 1: Identify and recognise common shapes

1. Write the name of each shape in the spaces provided.



.....



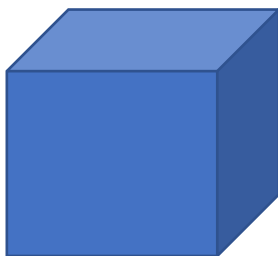
.....



.....




.....



.....

2. Harinder says that her room looks like a square.
Draw a square.

3. Babita draws a shape which looks like this:




She says: 'This is a square'.

Do you agree with Babita? Explain your answer.

Answer:.....
.....

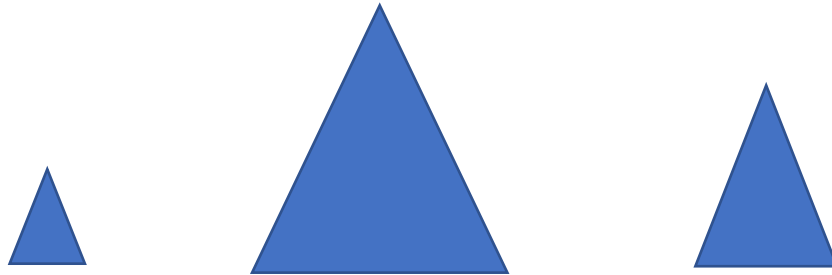
4. What is the same and what is different about these two shapes?



Answer:.....
.....

Entry 1: Describe and make comparisons in words between measures of items

1. Tick the medium-sized shape.



2. Amla wants to pick the longest sofa to put in her living room. Tick the longest sofa below.



3. Match each glass with the words that describe its capacity.



half full

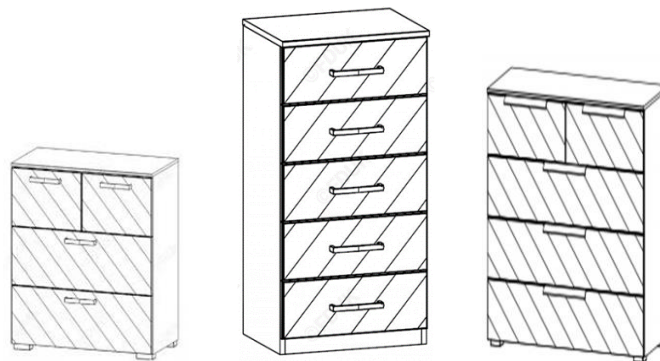


full



empty

4. Siobhan wants to buy the shortest chest of drawers. Tick the one she should buy.

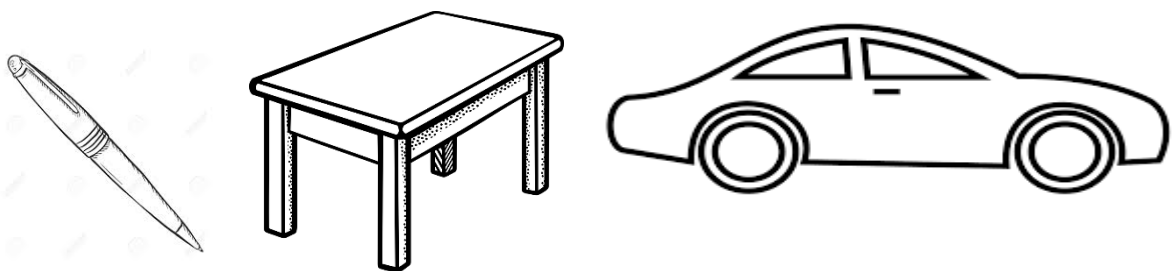


5. Sam thinks that mirror A is narrower than mirror B.



Do you agree with him?

6. Complete the sentences below, using the words: lighter, heavier, lightest, heaviest.



A pen is than a table.

A car is than a table.

The car is the The pen is the

Entry 1: Recall the number of days in a week, months and seasons in a year and name and sequence them.

1. How many days are there in a week?

2. How many months are there in a year?

3. How many seasons are there in a year?

4. Fill in the gaps with days of the week:

Monday,, Wednesday,, Friday,
....., Sunday

5. Fill in the gaps with the months of the year:

....., February,, April,, June,
....., August,, October,, December

6. Fill in the gaps with the seasons of the year below:

spring,,, winter

7. Enes ordered the days of the week like this:

Monday, Tuesday, Wednesday, Thursday, Friday, Sunday, Saturday.

Has he ordered them correctly?

Answer:

8. Magda ordered the months of the year like this:

**January, February, March, April, May, July, June,
August, September, October, November, December**

Has she ordered them correctly?

Answer:

9. Orla ordered the seasons of the year like this:

winter, spring, summer, autumn

Has she ordered them correctly?

Answer:

Entry 1: Read 12 hour digital and analogue clocks in hours

1. What time is shown by these clocks?



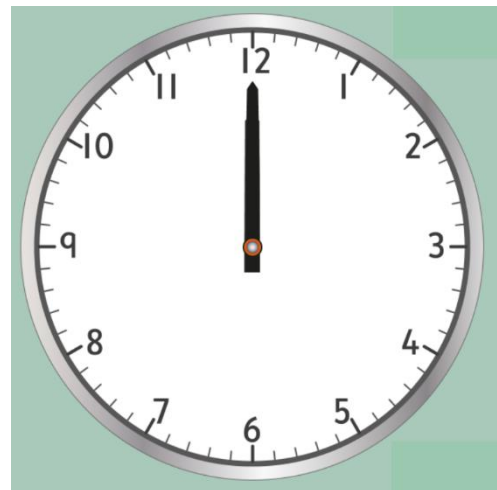
..... o'clock



..... o'clock

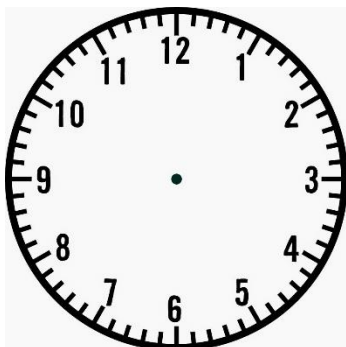


..... o'clock



..... o'clock

2. Draw 11 o'clock in these two clock faces.



3. Libby needs to leave the house at 8. This is what the clock shows.



Is it time for Libby to leave the house? If not, is it early or late?

Answer:

4. Omar thinks it is 5 o'clock. Is he right? Explain.



Answer:

Entry 1: Recognise coins and notes and write simple amounts of money using correct notation

1. Write under each coin its value in '£' or 'p'.



.....

2. Write next to each note its value in '£' or 'p'.



.....



.....



.....

3. Magda has these coins in her pocket. How much money does Magda have in total?



Answer:

4. How much money is represented by these two notes?



Answer:

5. Hannah says she has twelve pence left in her purse. She writes this amount of money as:

£12p

Do you agree with the way Hannah has written it?
Explain your answer.