

# Functional Skills Mathematics (4748) Entry 1 Sample Assessment

## Candidate's paper – Non-calculator Craft Shop

**Time allowed – 25 minutes**

Marks: 8

Name: \_\_\_\_\_

City & Guilds Enrolment Number: \_\_\_\_\_

Date of registration: \_\_\_\_\_


Date of assessment: \_\_\_\_\_

### You will need

- a pen with black or blue ink
- a pencil
- a rubber
- a ruler.

You may use a dictionary.

You must **not** use a calculator.



### Instructions

- Read each question carefully.
- Answer **all** the questions.

### Candidate's declaration:

I confirm that this assessment is my own work.

**Candidate's signature** \_\_\_\_\_

**Date** \_\_\_\_\_

## Non-calculator paper

There are **8** marks available.

You must **not** use a calculator.



**Q1**

Work out **15 + 5 =**

.....

**1 mark**

**Q2**



What is **18 take away 11** ?

.....

**1 mark**

**Q3**

Tick the longest table.



**1 mark**

**Q4**

**14**  **8 = 6**

Write the correct symbol to finish the calculation.

**1 mark**

**Q5**



**Jug A**



**Jug B**

**Jug A has ..... Jug B.**

Choose the correct words to finish the sentence.

- A the same amount of water as ☐
- B less water than ☐
- C more water than ☐
- D an equal amount of water to ☐

**1 mark**

**Q6** The craft shop has a delivery of wooden ducks.

The ducks are all different heights.

**11cm**

**6cm**

**3cm**

**20cm**

**12cm**

Write these heights in order.

Start with the smallest first.

.....cm

.....cm


.....cm

.....cm

.....cm

**1 mark**

**Q7** The craft shop has these shapes to make into gift tags.



The owner wants to use white triangles.

Show which shapes she will use.  
Tick them.

**1 mark**

**Q8** A customer buys a sheet of wrapping paper for 12p  
She pays with a 20p coin.  
This is how she works out how much change she should get.

$$20p - 12p = 8p$$

Show how the customer can check her answer.

Show your check here.

**1 mark**

**Total marks: 8**

**End of non-calculator paper.**

**This page is intentionally blank**

# Functional Skills Mathematics (4748)

## Entry 1 Sample Assessment



www.cityandguilds.com  
March 2020  
Version 1.2

### Candidate's paper – Calculator allowed

#### Craft Shop

**Time allowed – 65 minutes**

**Marks: 24**

Name: \_\_\_\_\_

City & Guilds Enrolment Number: \_\_\_\_\_

Date of registration: \_\_\_\_\_

Date of assessment: \_\_\_\_\_

#### **You will need**

- a calculator
- a pen with black or blue ink
- a pencil
- a rubber
- a ruler.

You may use a dictionary.

#### **Instructions**


- Read each question carefully.
- Answer **all** the questions.

#### **Candidate's declaration:**

I confirm that this assessment is my own work.

**Candidate's signature** \_\_\_\_\_


**Date** \_\_\_\_\_



## Calculator paper

There are **24** marks available.

You may use a calculator.






## Q1

Write the seasons of the year in order.  
Start with **spring**.

**1 mark**

## Q2



What is the name of this shape?

**1 mark**

### Q3

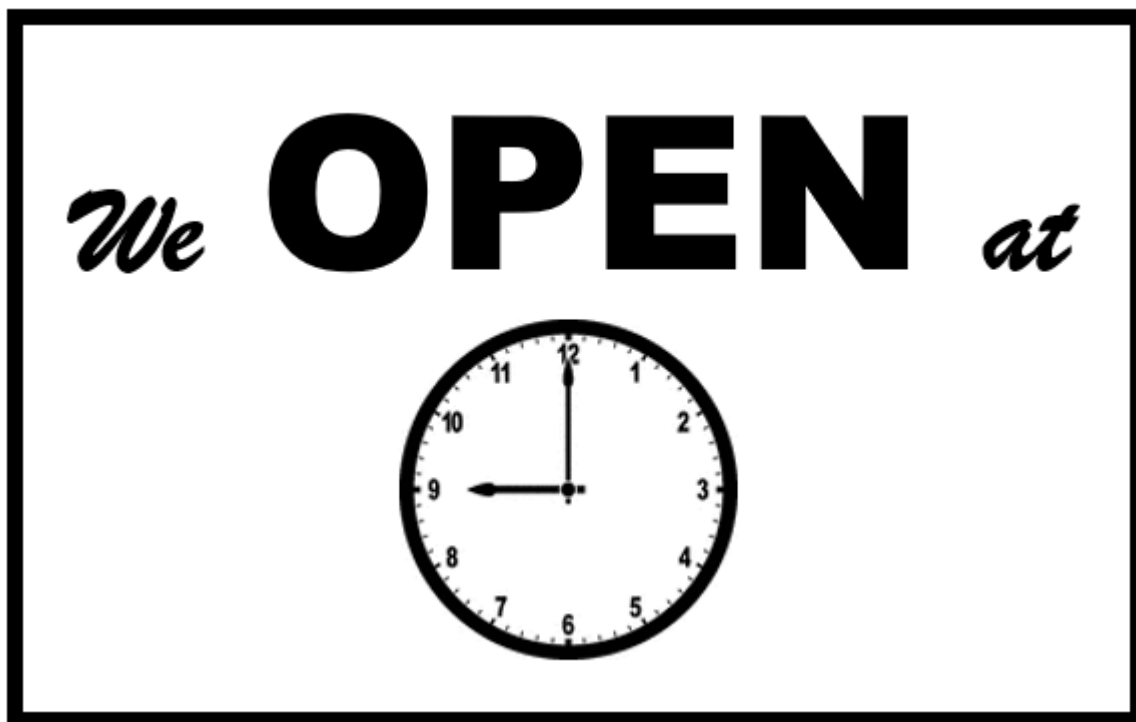


Tick all the 1p coins.

**1 mark**

**Q4** A man visits a craft shop.

This is the sign on the door.



The man checks the time on his watch.



**a** Is the shop open now?  
How do you know?

**Yes/No**.....

**I know because** .....

.....

**2 marks**

- b** The shop assistant tells the man the craft shop does not open on Sunday and Monday.

How many days of the week is the shop open?

..... days

**1 mark**

- Q5** The craft shop sells these model animals.

A man wants to buy an owl.

This is the price list.



- a** What does the man need to pay?

£.....

**1 mark**

The man has these coins.



**b** Which coins will he use to pay for the owl?  
Tick them.

1 mark

The assistant looks for a model owl.

This is the display in the craft shop.



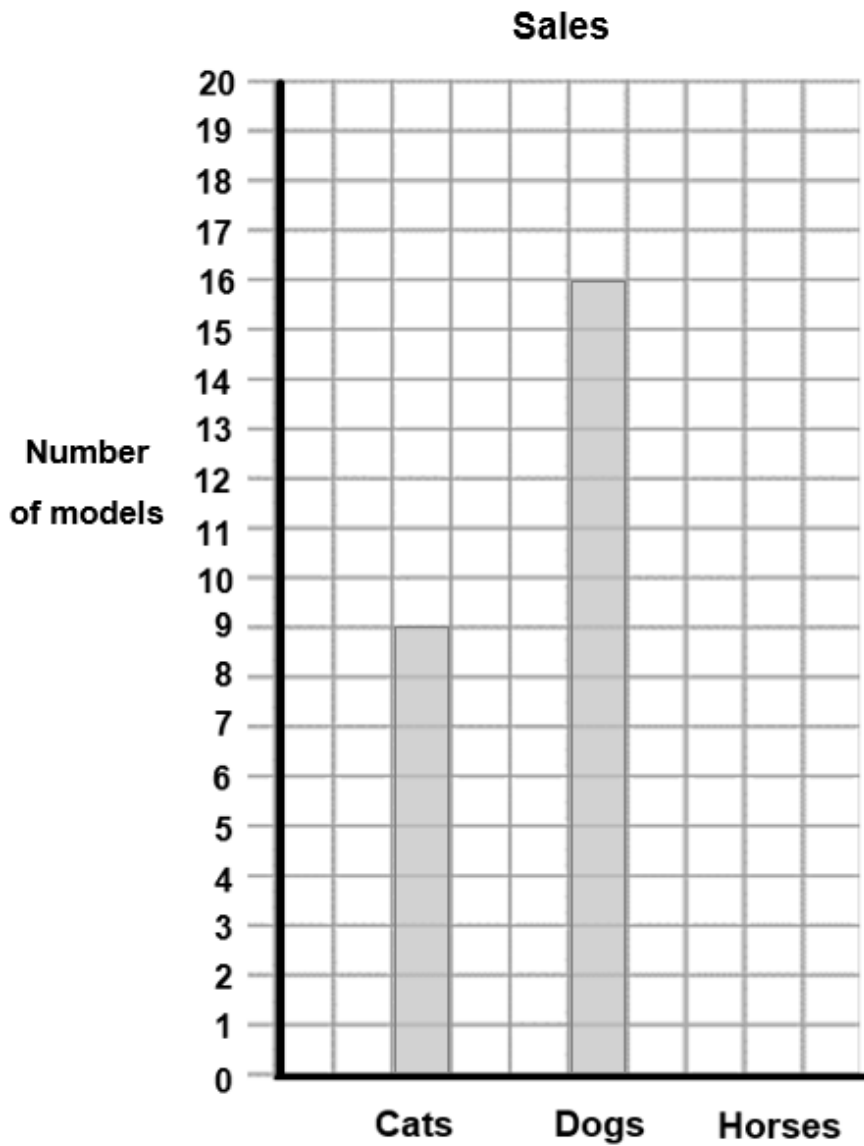
**c** Use the picture of the display to finish this sentence.

The owls are .....the table.

1 mark

The manager wants a chart to show the number of model animals sold last week.

The shop sold 13 horses last week.



d

Draw in the bar for **horses**.

1 mark

e

Explain what your chart shows about the numbers of models sold.

.....

.....

1 mark

- 6 A customer wants to buy a plate to paint.  
She wants to paint the biggest plate.

She sees these plates.



- a Tick which plate she will buy.

1 mark

The woman pays with this note.



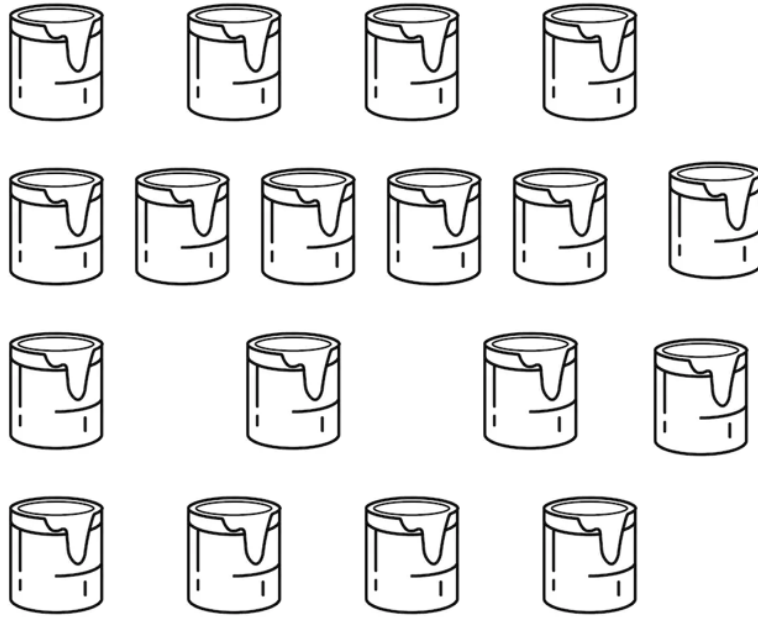
- b What change will she get? Put units on your answer.

Show your working out

Change \_\_\_\_\_

3 marks

The owner counts these empty pots of paint today.



Yesterday there were 10 empty pots of paint.

**c**

Complete the sentences.

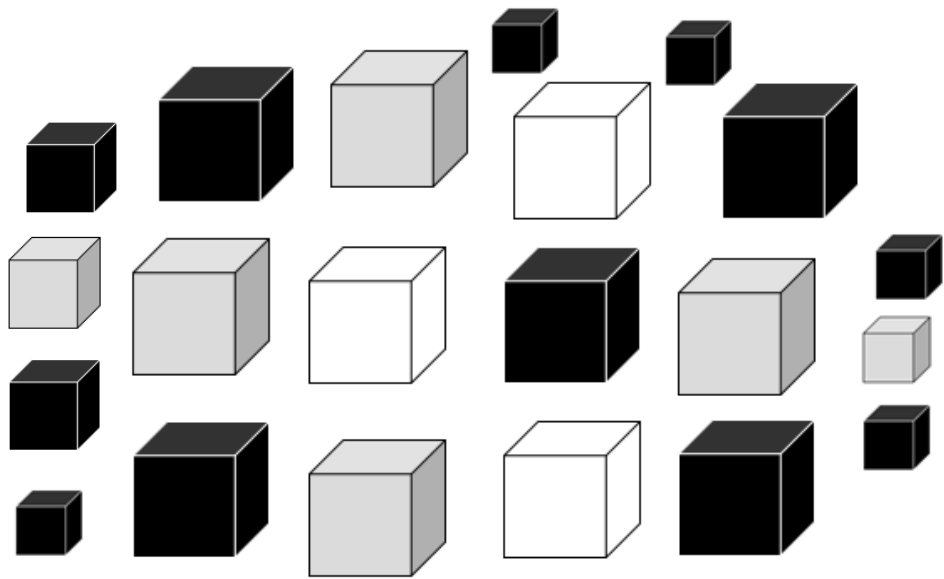
The owner counted ..... empty pots of paint today.

The **number** of empty pots today is ..... more than the number of empty pots yesterday.

**2 marks**

**Q7** The craft shop sells gift boxes.

Here are the boxes.



The owner asks the shop assistant how many black gift boxes there are in the shop.

**a** What does the shop assistant tell the owner?

There are..... black gift boxes.

**1 mark**

Small gift boxes cost 20p each.

A customer wants to buy one small gift box.

He has these coins.



**b** Tick the coin to use to pay for the gift box.

**1 mark**



8 The manager keeps a record of the number of mugs, bowls and plates sold last week.

He starts to draw a tally chart to show this information.

This is the number of plates sold.



Item	Tally
Large mugs	
Small mugs	
Bowls	
Plates	

a Complete the tally chart to show the number of plates sold.

2 marks

The manager wants to know how many more small mugs were sold than large mugs.

**b** What will you tell her?

Space for working.

.....

**2 marks**

The manager also wants to know how many bowls were sold.

**c** What will you tell her?

.....

**1 mark**

**Total marks: 24**

**End of calculator paper**